



1) How much money is this?



12p

2) What is the value of this coin?



£2

3) Which is the greatest number?

58

89

85

89

4) What is double 3?

6

1) Write or draw one thing you do **before** school.

e.g. brush teeth, eat breakfast

2) How much?




50p

3) Which is smaller 62 or 26?

26


4) What is double 8?



16

1) Which month comes before May?

April



2) Which is more?



or



3) Write the numbers in order from smallest to largest.

75

52

61


52, 61, 75

4) What number comes before 16?

15

1) Which day comes before Friday?

Thursday



2) Which is more?



or



3) Which is true?

$50 > 60$ or $50 < 60$

$50 < 60$

4) What number is one more than 29?

30


1) What time does the clock show?



7 o'clock



2) Here is 10p. Draw another way to make 10p



e.g.



3) Which is true?


$58 > 55$ or $58 < 55$

$58 > 55$

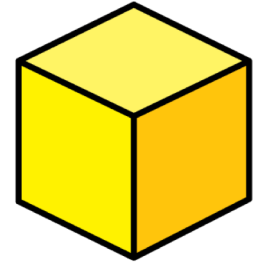
4) What number is one less than 50?

49

1) What time does the clock show?



2 o'clock




2) Which month comes before January?

December

3) Here is 5p. Draw a different way to make 5p




e.g.



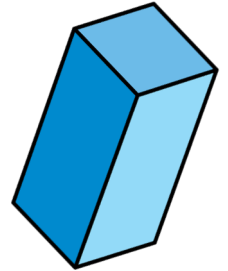
4) What is one more than 25?

26

1) What is the time on the clock?



Half past 10



2) Which day comes before Monday?

Sunday


2) Which is more?



or




4) What is double 9?




18

1) What is the time on the clock?



Half past 4



2) Which day comes after Monday?


Tuesday

3) Which value does not have a coin?


5p 8p 2p 10p

8p

4) What is double 6?



12



1) Which is longer?

1 minute or 10 seconds

1 minute

2) Which month comes after October?

November

3) Which value does not have a coin?

5p 10p 15p 20p

15p

4) What is 15 add 3?

18

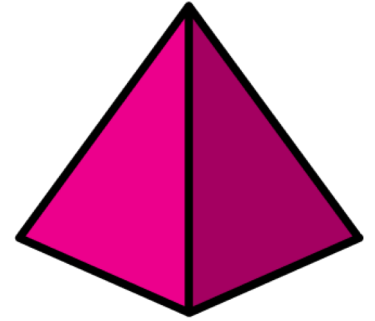
1) Which is longer?

1 minute


or

1 hour

1 hour



2) What time does the clock show?



Half past 12

3) Find one more and one less.

1 less
28

29

1 more
30

4) What is 15 takeaway 5? 10